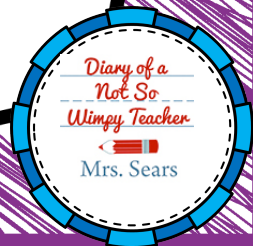

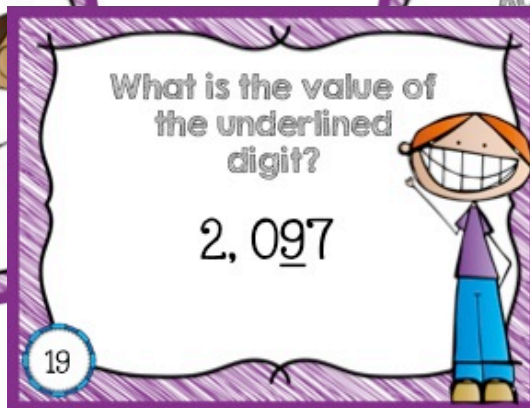
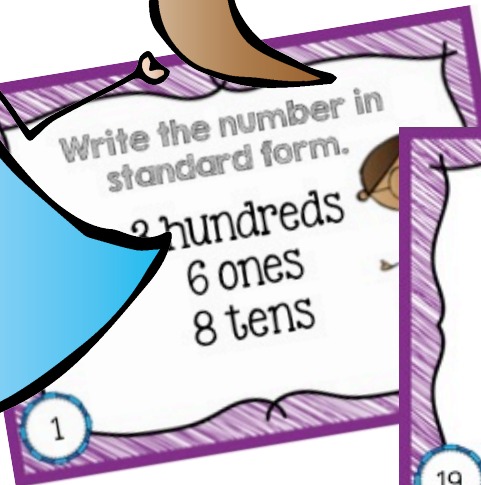



Place Value

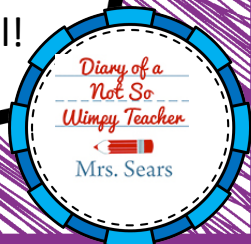
24 Task Cards for 3 & 4 Digit Numbers



Suggestions for Using Task Cards


There are MANY different ways that task cards can be used in your classroom to increase student engagement. Here are a few suggestions:

- ◆ Use in a small group.
- ◆ Use in a literacy center.
- ◆ Use as a whole group scoot activity. Place the cards around the room and have students get up and move around to find the cards and answer the questions.
- ◆ Use task cards with a familiar children's game such as Candy Land, Connect Four or Tic Tac Toe. In order to take their turn in the game, they must first correctly answer the question on the task card.
- ◆ Use the cards to play a whole group game of jeopardy. This is especially fun with several sets of task cards. Each set can be a different category with five or six cards under it with money amounts. Students choose a category and a money amount. Flip the card over and have them answer. If they are correct, they earn the money amount for their team.
- ◆ Give students a task card to glue in their journal. Have them answer the question and provide evidence in a journal entry.
- ◆ Display a card on your board with a document camera as a warm-up. Increase the engagement by having students work in teams. Give each team a buzzer or bell!



Write the number in
standard form.


3 hundreds
6 ones
8 tens



1

Write the number
in expanded
form.


575



2

What is the value of
the underlined
digit?

496



3

Round the number
to the nearest
100.


176



4

Write the number in
standard form.


6 tens
2 hundreds
7 ones



5

Write the number
in expanded
form.


134



6

What is the value of
the underlined
digit?

754



7

Round the number
to the nearest
10.


678



8

Write the number in
standard form.


4 ones
7 tens
5 hundreds



9

Write the number
in expanded
form.


507



10

What is the value of
the underlined
digit?

697



11

Round the number
to the nearest
10.


886



12

Write the number in
standard form.


9 tens
0 hundreds
2 ones
6 thousands



13

Write the number
in expanded
form.


4,795



14

What is the value of
the underlined
digit?

8,124



15

Round the number
to the nearest
100.


5,654



16

Write the number in
standard form.


9 ones
7 thousands
1 ten
5 hundreds



17

Write the number
in expanded
form.


6,093



18

What is the value of
the underlined
digit?


2,097



19

Round the number
to the nearest
10.


8,764



20

Write the number in
standard form.


6 tens
6 thousands
8 hundreds
0 ones



21

Write the number
in expanded
form.


4,607



22

What is the value of
the underlined
digit?

8,999




23

Round the number
to the nearest
10.

2,348




24



Name: _____

Place Value

1.	2.	3.	4.	5.	6.
7.	8.	9.	10.	11.	12.
13.	14.	15.	16.	17.	18.
19.	20.	21.	22.	23.	24.



Answer Key

Name: _____

Place Value

1. 386	2. $500+70+5$	3. 90	4. 200	5. 267	6. $100+30+4$
7. 4	8. 680	9. 574	10. $500+7$	11. 600	12. 890
13. 6,092	14. $4,000+700+90+5$	15. 20	16. 5,700	17. 7,519	18. $6,000+90+3$
19. 90	20. 8,760	21. 6,860	22. $4,000+600+7$	23. 8,000	24. 2,350

Thank You!

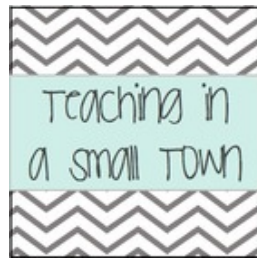

Be sure to follow me on Facebook for more freebies and special discounts. Click on the banner below. Also, be sure to check out my other task cards!

Diary of a Not So Wimpy Teacher



Written by Mrs. Sears

Clip Art By:



Math Task Cards

Area

24 Differentiated Task Cards

What is the area? What is the area? What is the area?

Perimeter

24 Differentiated Task Cards

What is the perimeter? What is the perimeter? What is the perimeter?

Time

28 Differentiated Task Cards

What time is it? What time is it? Elapsed Time

Two-Step Word Problems

24 Task Cards

Two-Step Word Problems

Addition Word Problem Task Cards

$2 + 1 = 3$

Addition Addition Addition

Subtraction Word Problem Task Cards

$5 - 1 = 4$

Subtraction Subtraction Subtraction

ELA Task Cards

Parts of Speech

24 Task Cards



What part of speech is the underlined word?
The cat jumped over the fence.

What part of speech is the underlined word?
My favorite game is chess.

What part of speech is the underlined word?
The teacher spoke to the class.

What part of speech is the underlined word?
The boy has a red hat.

Parts of Speech 2

24 Task Cards



What part of speech is the underlined word?
The boy has a red hat.

What part of speech is the underlined word?
The boy has a red hat.

What part of speech is the underlined word?
The boy has a red hat.

What part of speech is the underlined word?
The boy has a red hat.

Parts of Speech 3

24 Task Cards



What part of speech is the underlined word?
The boy has a red hat.

What part of speech is the underlined word?
The boy has a red hat.

What part of speech is the underlined word?
The boy has a red hat.

What part of speech is the underlined word?
The boy has a red hat.

Syllables

24 Task Cards



How many syllables are in the word?
puppy

Break the word into syllables.
puppy

Write the word in syllables.
puppy

Homophones

24 Task Cards



Complete the sentence with the correct homophone.
The boy was wearing a blue shirt.

Complete the sentence with the correct homophone.
The boy was wearing a blue shirt.

Complete the sentence with the correct homophone.
The boy was wearing a blue shirt.

Inference

24 Task Cards




What can you infer from the picture?
The boy is wearing a red hat.

Where am I?
I am wearing a red hat.

What day is it?
I am wearing a red hat.

Dictionary Guide Words

24 Task Cards




Use the guide words to find the word in the dictionary.
The word is between cat and dog.

Use the guide words to find the word in the dictionary.
The word is between cat and dog.

Use the guide words to find the word in the dictionary.
The word is between cat and dog.

Reference Materials

24 Task Cards




Where would you find...
a synonym for happy?

Where would you find...
a synonym for happy?

Where would you find...
a synonym for happy?

Regular Plural Nouns

24 Task Cards




Write the plural form of the noun.
branch

Write the plural form of the noun.
penny

Write the plural form of the noun.
bus

Irregular Plural Nouns

24 Task Cards



Write the plural form of the noun.
child

Write the plural form of the noun.
child

Write the plural form of the noun.
life

Fact or Opinion?

24 Task Cards




Is this a fact or an opinion?
The best time for a dog to sleep is at night.

Is this a fact or an opinion?
The best time for a dog to sleep is at night.

Is this a fact or an opinion?
The best time for a dog to sleep is at night.

Author's Purpose

24 Task Cards



What was the author's purpose?
to inform

What was the author's purpose?
to inform

What was the author's purpose?
to inform